



Swastik's Sattva Vikas School

Std : II Logical Thinking and Creative Writing
Second Test - January 2007



Name : Joshi Tejshree Tejasbhai

[Date : 12/01/2007

1.(A) Write 10 lines about 'My Birthday Party' using the words given in the box:














1. balloons
2. decoration
3. candles
4. cake
5. cold drinks
6. cap
7. gifts
8. ice-cream
9. snacks
10. cards
11. flowers
12. sweets

(B) Now draw a balloon, a cap, a cake, an ice-cream and some candles

--	--	--	--	--

2. Look at the weather chart carefully and then fill in the blanks:

Days of the Week		Weather Chart
SUNDAY		 windy
MONDAY		 sunny
TUESDAY		 cloudy
WEDNESDAY		 rainy
THURSDAY		
FRIDAY		
SATURDAY		

1. It was _____ on Tuesday and Friday.
2. Monday and Wednesday were _____.
3. It was cloudy on _____.
4. _____ and _____ were rainy days.

3. Find the four items carrot, apple, lemon and cake in the grid given below:

Write at least 2 sentences on each.

c	a	k	e	p
a	l	g	p	a
r	e	r	a	p
r	m	n	o	p
o	o	q	p	l
t	n	s	t	e

carrot _____

apple _____

lemon _____

cake _____

4. The animals of the forest have brought their babies to the 'Well-Baby Clinic' at the end of the forest. The babies and their mothers are standing in a row. Look at the picture. Now think and write what complaint each mother has?

Use the clues from the box:

overweight, underweight, unable to jump, does not have stripes, cannot run fast, does not like honey



Mother elephant says that _____

Mother tiger says that _____

Mother deer says that _____

Mother monkey says that _____

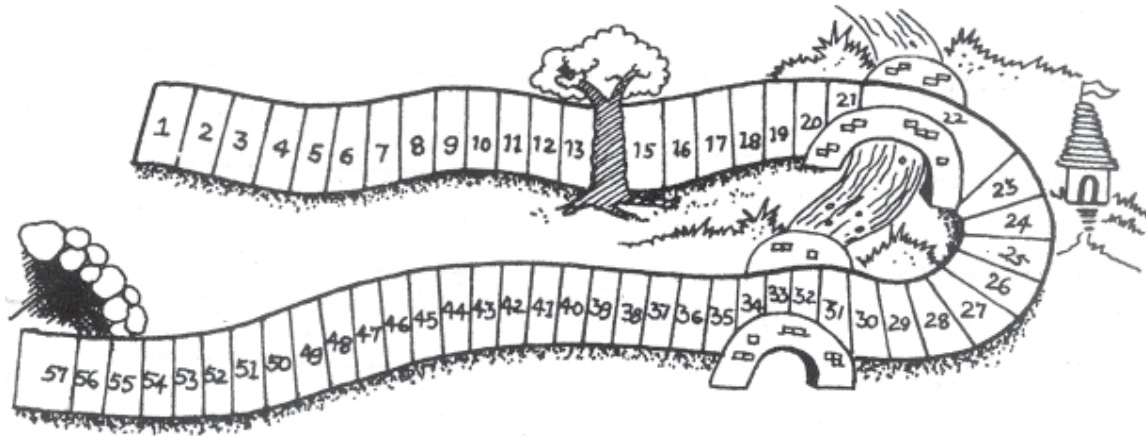
Mother bear says that _____

Mother duck says that _____

5. Look at the picture and write what they are talking:



6. ODDS AND EVENS!!! Look at the picture carefully and answer the questions:



1. Continue the odd numbers.
1, 3, 5, 7, _____, _____, _____, _____, _____
2. Continue the even numbers
2, 4, 6, 8, _____, _____, _____, _____, _____
3. Which even number is behind the tree? _____
4. Which odd number is nearest the tunnel? _____
5. Which odd number is beside the temple? _____
6. Which is the last even number? _____

7. Rahul is lost in the forest. Will you help him to reach his house?

Just solve the sums and presto! He is there.

$$\begin{array}{r} \boxed{3} + \boxed{5} \\ = \\ \boxed{} \\ - \\ \boxed{6} \\ = \\ \boxed{} \\ = \boxed{2} \\ \boxed{} + \boxed{8} = \boxed{12} - \boxed{} = \end{array}$$