



Sattva Vikas School  
A Raja Pathak Initiative

# Sattva Vikas School

Affiliated to CBSE

Pre-Primary to Higher Secondary


Std - II Logical Thinking and Creative Writing (Half Yearly Assessment)

Name :


Date:

1. With the help of the given picture and helping words in the box write five sentences.

built house planted ladder men women fence mason



3. Here is a picture. You can see living and non-living things. Name all the living things in the space given. Also fill in the blanks:



---

---

---

---

---

---


---

---

---

---

1. This is a picture of a \_\_\_\_\_.
  2. The cat is sitting on the \_\_\_\_\_.
  3. There are \_\_\_\_\_ cars on the road.
  4. The dog is \_\_\_\_\_.
  5. There are two \_\_\_\_\_ with the children.
  6. \_\_\_\_\_ is swimming in the water.
4. Look at the picture of flowers given below and write their names.  
The first letter of the name is given.



R

S

L

Which is your favourite flower? Why?

---

---



5. Look at the pictures and identify the person.



\_\_\_\_\_

6. Look at the pictures. Fill in the blanks with the correct words from the box.

on                      behind                      in                      between

1. The cap is \_\_\_\_\_ the boy's head.



2. The fruits are \_\_\_\_\_ the basket.



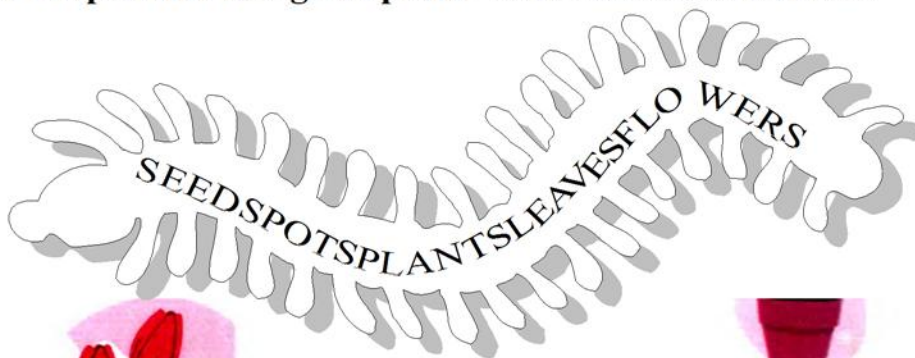
3. The mat is \_\_\_\_\_ the boy.



4. Mala is \_\_\_\_\_ her mother and father.



7. Label the pictures using the plural words in the wordworm.



\_\_\_\_\_



\_\_\_\_\_



\_\_\_\_\_



\_\_\_\_\_



\_\_\_\_\_

8. Reorder these letters to get names of animals:

EGRIT

EEATNLHP

EFRAFIG

ELACM

AAGKNOOR

9. There are 250 children playing in a playground. Out of them 128 children left the playground. How many children are still playing?

\_\_\_\_\_

\_\_\_\_\_

\_\_\_\_\_

Ans: \_\_\_\_\_

10. Sanjana has 35 ice-creams. Help her to give equally to her 7 friends.



--	--	--	--	--	--	--

$$35 \div 7 = \bigcirc$$

Sanjana gave  $\bigcirc$  ice-creams to each friend.

11. Do as directed:





$\bigcirc$  tricycles, each has  $\bigcirc$  wheels

How many wheels in all?  $\bigcirc$

We can say  $\bigcirc$  is repeatedly added  $\bigcirc$  times.

Therefore,  $\bigcirc$  times  $\bigcirc = \bigcirc$

12. Match the following plane shapes.



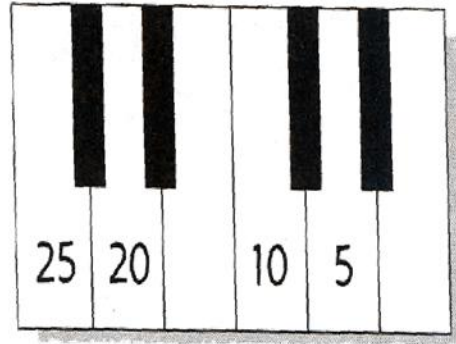

Triangle

Circle

Rectangle

Square

13. Follow the pattern and fill the missing musical numbers:

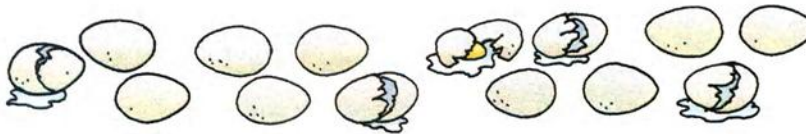


14. Find how many.....


1. crayons are broken ?



2. eggs are broken ?



3. books are open ?




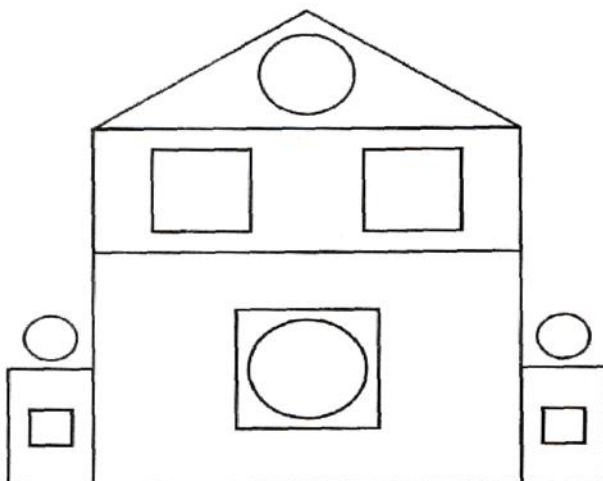
15. Count and write the shapes:

CIRCLES \_\_\_\_\_

TRIANGLES \_\_\_\_\_


SQUARES \_\_\_\_\_

RECTANGLES \_\_\_\_\_





16. Look at the pictures and complete the puzzle:



17. Write personal pronoun in the blank provided below the picture.

