



Sattva Vikas School
A Raja Pathak Initiative

Sattva Vikas School

Affiliated to CBSE

Pre-Primary to Higher Secondary

Std - IV Logical Thinking and Creative Writing (Half Yearly Assessment)

Name :

Date:

1. Write an imaginary story.

Begin like this ...

This is a Lion. Its name is Shantu. It lives in a circus.
It was rescued by the circus owner when it was just
two years old.



2. The numbers below follow a certain pattern.



If the pattern above is continued, which number will appear in the pattern ?

- (a) 30 ☐ (b) 32 ☐ (c) 34 ☐ (d) 42 ☐

3. Shown below are four boxes containing some packets of toffees. Each packet contained 5 toffees in the beginning. Anu opened 1 packet from one of the boxes and took a toffee.



15 Toffees



25 Toffees



30 Toffees



34 Toffees

Which box could it be ?


(a) Box 1 ☐

(b) Box 2 ☐

(c) Box 3 ☐

(d) Box 4 ☐


4. Ritu drew this figure:



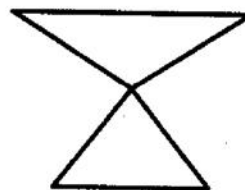
Aman drew a figure which had 2 straight lines more than Ritu's figure. Which of the following could be Aman's figure?



A.



B.




C.




D.



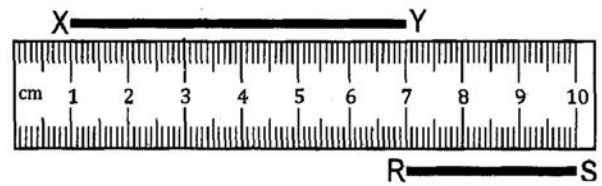
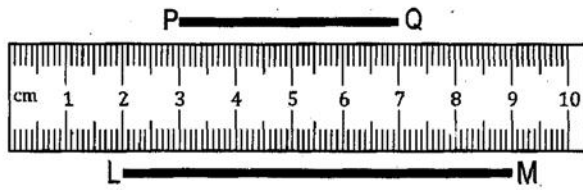
5. In the chess board shown here, the white squares cover _____ of the whole board.



6. Which part of the figure below is shaded?



7. Which of these lines is 7 cm long?



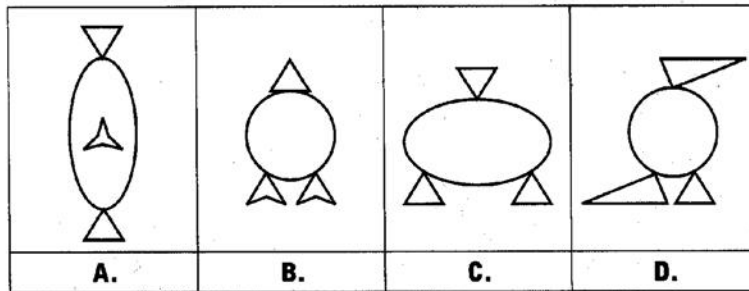
(a) LM ☐

(b) PQ ☐

(c) RS ☐

(d) XY ☐

8. Which of these figures is made up of 3 triangles and a circle?



Ans. _____

9. Classify the following into the correct categories.

oak	butterfly	bamboo	daffodil	koala bear
lark	robot	penguin	dolphin	digital camera
steel	boat	pine	petrol	coconut tree
soil	money	palm	computer	natural gas
wind	water	oxygen	elephant	rubber tree
tulip	panda	spaceship	coal	mobile phone

Living things

Non-living things

Animals	Plants
butterfly	bamboo

Man-made	Natural
computer	water

10. Which of the following could be 1 metre in length?

(a) Amit's diary

☐

(b) Ritu's new eraser

☐

(c) father's shoe

☐

(d) grandfather's walking stick

☐


11. Look at the picture. Write at least five sentences about the picture using the helping words and phrases given.

Sam Look for Sprout Soil Mushroom

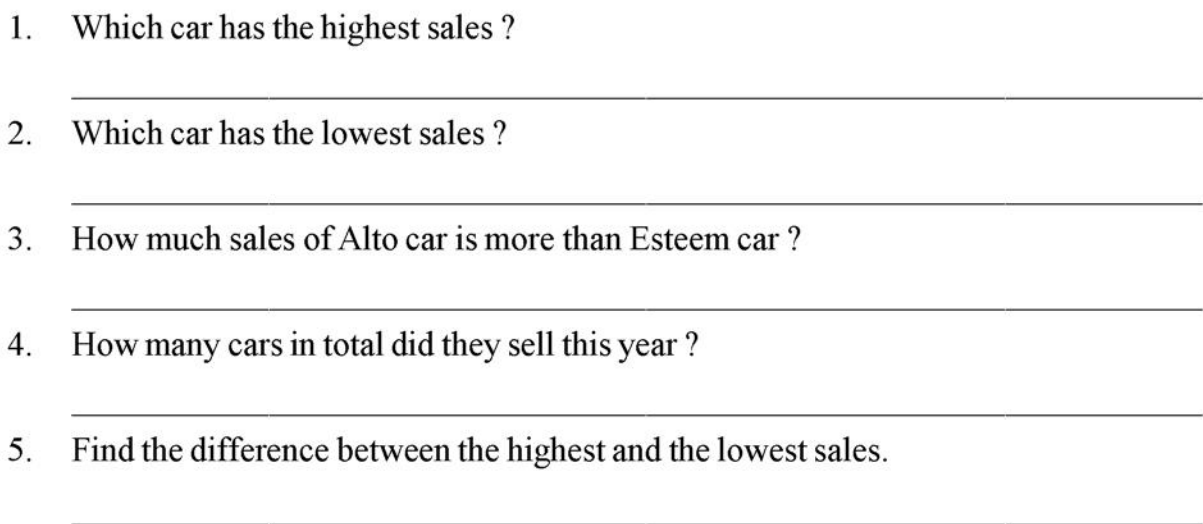


12. Look at the following pictures. Write an interesting story. You may use the words given in the box. Give your composition a suitable title.

harvest leave monkey drop sea float seashore grow travel



13. The following bar graph shows the sales of different cars in a city. Looking at the figure, answer the following questions.



14. Fill in the blanks to give the sentences meaning. Use the questions below each blank to help you.

1. _____ bought _____ from _____ .
Who ? What ? Where ? When ?
2. My _____ made _____ to take to the _____ .
Who ? What ? Where? When ?
3. _____ went to _____ with _____ .
Who? Where? Who? When?
4. The black _____ swam _____ with _____ .
What? Where? What?
5. A beautiful _____ is perched _____ .
What? Where?
6. Mother placed _____ on the _____ .
What ? Where ?

15. An acrostic poem is a piece of writing whereby the first to the last letter spells out a word vertically. The beginning letter of each line is used to make a sentence that tells you of the subject you are writing.

Write an acrostic poem on the following scenery by means of describing it in full.

E.g.

B	asking in the hot sun
E	ating sandwiches by the shore
A	dults playing volleyball
C	hildren splashing all around in the sea
H	aving lots of fun.

S	
U	
N	
S	
E	
T	

