



Sattva Vikas School  
A Raja Pathak Initiative

# Sattva Vikas School

Affiliated to CBSE

Pre-Primary to Higher Secondary

Std - VI Logical Thinking and Creative Writing (Half Yearly Assessment)

Name :

Date:

1. Put on your thinking cap and write an imaginative story. You can take help of the words given.





Caring  
Friendship  
Sharing

Sun  
Nature  
Place

Animals  
Greenery  
Enjoyment


Glowing  
Birds  
Crowing



2. Enjoy this

**WORD HUNT!** The circled numbers tell you the number of letters in each word. Describe this 'Anand Gram Farm' in your own words.

D	O	G	P	K	C	U	D	B
O	E	N	E	H	R	I	U	O
N	A	G	I	E	A	C	N	N
K	R	C	D	M	K	O	R	N
E	K	D	K	E	R	C	O	E
Y	U	L	T	P	H	K	H	T
G	I	P	A	L	O	O	T	S
M	F	A	R	M	G	A	T	E



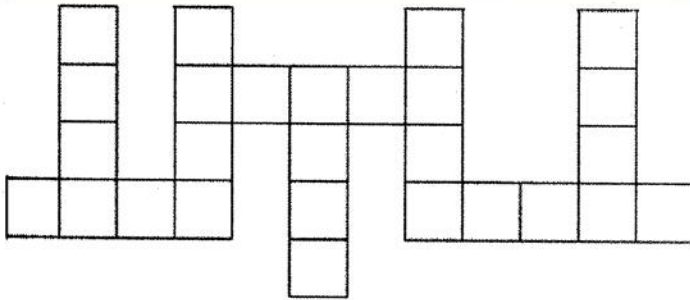
1. \_\_\_\_\_
2. \_\_\_\_\_
3. \_\_\_\_\_
4. \_\_\_\_\_
5. \_\_\_\_\_
6. \_\_\_\_\_
7. \_\_\_\_\_
10. \_\_\_\_\_
13. \_\_\_\_\_

8. \_\_\_\_\_
11. \_\_\_\_\_
14. \_\_\_\_\_

9. \_\_\_\_\_
12. \_\_\_\_\_

**3. Can you fit these words into the criss-cross?**

feet      hand      head      knee lung  
nose      ankle      thigh



**4. If A means '+', B means '-', C means '×' and D means '÷', then what will be the value of 6 A 4 D 2 C 10 B 4 ?**

\_\_\_\_\_

**5. In each question given below, four words are given, one of which may be wrongly spelt. Circle that word. Also write the correct spelling in the given blank.**

1. (a) mortality      (b) jewellery      (c) paragraph      (d) rattling

Correct Spelling : \_\_\_\_\_

2. (a) enterprise      (b) gigantic      (c) begining(d) registered

Correct Spelling : \_\_\_\_\_

3. (a) emphasis      (b) sausage      (c) temination      (d) mansion

Correct Spelling : \_\_\_\_\_

4. (a) claim      (b) concurrent      (c) generation      (d) disiple

Correct Spelling : \_\_\_\_\_

5. (a) ocassion      (b) platinum      (c) miracle      (d) kindred

Correct Spelling : \_\_\_\_\_

**6. You have read many fairy tales in the library. So, put on your thinking caps and name them by filling the missing words in the given blanks:**

1. Goldilocks and the Three \_\_\_\_\_
2. The Three \_\_\_\_\_ Goats Gruff
3. The Tale of Peter \_\_\_\_\_
4. \_\_\_\_\_ and the Beanstalk.

**7. Solve each mathematical problem. Then turn your answer upside down to find an answer for each of the following:**

	Number	Word
1. $0.09 - 0.07 =$ a place for animals	_____	_____
2. $2000 + 95 + 700 + 250 =$ footwear	_____	_____
3. $0.2020 + 0.2020 =$ Santa's laughter	_____	_____



8. Mother is 20 years older than her daughter Meenu now. After 10 years, mother will be twice Meenu's age. Their present ages are \_\_\_\_\_

- (a) 20,40                      (b) 10,30                      (c) 5,25                      (d) 15,35

9. Complete the crossword with the help of the given clues:

**Across**

5. writing instrument (3)  
 6. Those whom we play and study with (7)  
 8. We go by it to our place of learning (6,3)  
 10. Award for doing well in games (5)  
 11. Drop in at someone's house (5)  
 13. He walked \_\_\_\_\_ to school before the exams (in a scared way) (9)  
 15. Brothers and \_\_\_\_\_ (7)  
 16. Finish (3)



**Down**

1. Our class Miss (7)  
 2. PT exercises done in a large group (5)  
 3. Lovely to look at (9)  
 4. The first step in Math, to total (3)  
 7. Orphans have neither mother nor father (2,7)  
 9. A company which flies planes, for example, Air India (7)  
 12. Each (5)  
 14. Can for throwing waste (3)

10. Three students Ekta, Anar and Neeti were given the following expressions and were asked to write down the number these represented.

Ekta: 52 tens + 3 ones

Anar: 5 hundreds + 23 ones

Neeti: 5 hundreds + 23 tens

Which two girls have the same answer ?

A. only Ekta and Anar ☐

B. only Ekta and Neeti ☐

C. only Anar and Neeti ☐

D. All of them will get the same answer ☐

11. Which among these is the least polluting fuel obtained from the earth?

A. coal ☐

B. kerosene ☐

C. electricity ☐

D. compressed natural gas ☐

12. Mosquitoes are carriers of many diseases. To make people aware of this danger, Aman and his friends put up signs, like the one shown here, at places where a lot of mosquitoes could be found.

At which of these places is this sign most likely to be found?

A. outside a hospital ☐

B. near a flowing river ☐

C. in front of a school ☐


D. by the side of a pond ☐



13. Tony made the shape shown by gluing 12 cubes together.

He then painted over the entire surface of the shape including the bottom. How many of the cubes will have exactly four faces painted?

A. 5 ☐ B. 6 ☐ C. 7 ☐ D. 8 ☐



14. If the day before yesterday is two days after Monday then what is it today?

\_\_\_\_\_

15. Find out the correct figure which will be the adjoining part of the given figure. Tick the correct option.

(a) (b) (c) (d)

1. (a) (b) (c) (d)

2. (a) (b) (c) (d)

卐 卐 卐 卐 卐